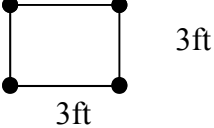
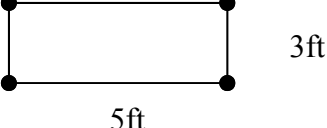
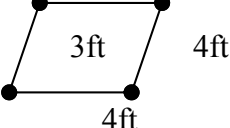
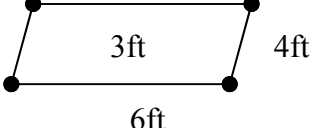


Perimeter & Area of the Four Basic Parallelograms of Plane Euclidean Geometry.

All answers for Perimeter and Area must have the correct labels.

Values inside the Parallelograms are the Heights.

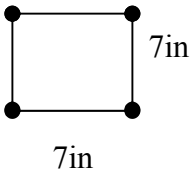

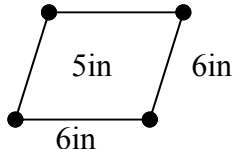
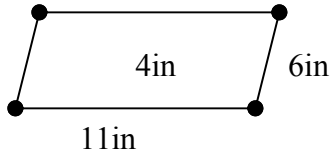
			
<p style="text-align: center;">Square</p> <p>Perimeter = S + S + S + S</p> <p>P = _____</p> <hr style="border-top: 1px dashed black;"/> <p>Area = S x S or S²</p> <p>Area = _____</p>	<p style="text-align: center;">Rectangle</p> <p>Perimeter = W + L + W + L</p> <p>P = _____</p> <hr style="border-top: 1px dashed black;"/> <p>Area = L x W</p> <p>Area = _____</p>	<p style="text-align: center;">Rhombus</p> <p>Perimeter = S + S + S + S</p> <p>P = _____</p> <hr style="border-top: 1px dashed black;"/> <p>Area = B * H</p> <p>Area = _____</p>	<p style="text-align: center;">Rhomboid</p> <p>Perimeter = W + L + W + L</p> <p>P = _____</p> <hr style="border-top: 1px dashed black;"/> <p>Area = B * H</p> <p>Area = _____</p>

These Two Sets of Problems should PRINT OUT on Two Sheets of Paper.

Perimeter & Area of the Four Basic Parallelograms of Plane Euclidean Geometry.

All answers for Perimeter and Area must have the correct labels.

Values inside the Parallelograms are the Heights.

			
<p style="text-align: center;">Square</p> <p>Perimeter = S + S + S + S</p> <p>P = _____</p> <hr style="border-top: 1px dashed black;"/> <p>Area = S x S or S²</p> <p>Area = _____</p>	<p style="text-align: center;">Rectangle</p> <p>Perimeter = W + L + W + L</p> <p>P = _____</p> <hr style="border-top: 1px dashed black;"/> <p>Area = L x W</p> <p>Area = _____</p>	<p style="text-align: center;">Rhombus</p> <p>Perimeter = S + S + S + S</p> <p>P = _____</p> <hr style="border-top: 1px dashed black;"/> <p>Area = B * H</p> <p>Area = _____</p>	<p style="text-align: center;">Rhomboid</p> <p>Perimeter = W + L + W + L</p> <p>P = _____</p> <hr style="border-top: 1px dashed black;"/> <p>Area = B * H</p> <p>Area = _____</p>

These Two Sets of Problems should PRINT OUT on Two Sheets of Paper.