

Word Problems Grades 4 to 8?

A 10 foot board is cut into 2 pieces.
Each piece is **exactly** the same length.
How long is each piece?

A 13 foot board is cut into 2 pieces.
One piece is 3ft **more than** the other.
How long is each piece?

A 15 foot board is cut into 2 pieces.
One piece is **twice** the other in length?
How long is each piece?

A 19 foot board is cut into 2 pieces.
One piece is **4ft more than twice** other.
How long is each piece?

#####

A 14 foot board is cut into 2 pieces.
Each piece is **exactly** the same length.
How long is each piece?

A 13 foot board is cut into 2 pieces.
One piece is 1ft **less than** other piece.
How long is each piece?

A 21 foot board is cut into 2 pieces.
One piece is **1/2. the other** in length?
How long is each piece?

A 19 foot board is cut into 2 pieces.
One piece is **2 less than half** other?
How long is each piece?

Word Problems Grades 4 to 8?

A 12 foot board is cut into 2 pieces.
Each piece is **exactly** the same length.
How long is each piece?

A 14 foot board is cut into 2 pieces.
One piece is 2ft **more than** other in length.
How long is each piece?

A 24 foot board is cut into 2 pieces.
One piece is **three times** other in length.
How long is each piece?

A 25 foot board is cut into 2 pieces.
One piece is **1ft more than three time** other
in length. How long is each piece?

#####


A 18 foot board is cut into 2 pieces.
Each piece is **exactly** the same length.
How long is each piece?


A 7 foot board is cut into 2 pieces.
One piece is 3ft **less than** other piece.
How long is each piece?

A 15 foot board is cut into 2 pieces.
One piece is **2/3 the other** in length?
How long is each piece?

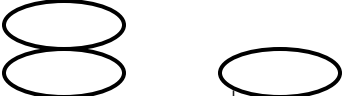
A 17 foot board is cut into 2 pieces.
One piece is **3 less than 2/3** other?
How long is each piece?

Word Problems Grades 4 to 8?


 = 10ft


+3
 = 13ft


 = 15ft

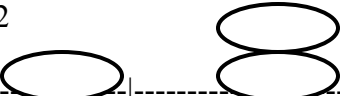
+4
 = 19ft

#####


 = 14ft

-1
 = 13ft


 = 21ft


-2
 = 19ft

Word Problems Grades 4 to 8?


 = 12ft


+2
 = 14ft


 = 24ft


+1
 = 25ft

#####

 = 18ft

-3
 = 7ft

 = 15ft

-3
 = 17ft